

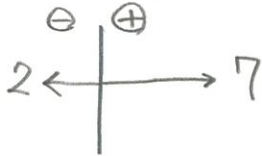
中1～第2回正の数・負の数の加法～

氏名：

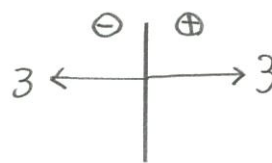
解答・解説

例題 次の計算をしなさい。

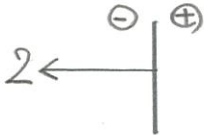
(1)  $(+7) + (-2) = +5$



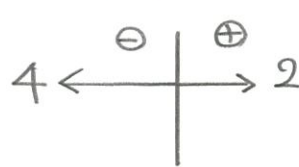
(2)  $(-3) + (+3) = 0$



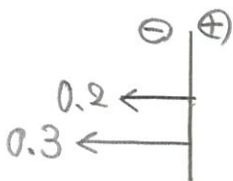
(3)  $0 + (-2) = -2$



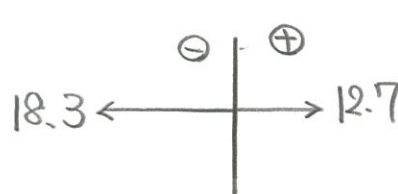
(4)  $(+2) + (-4) = -2$



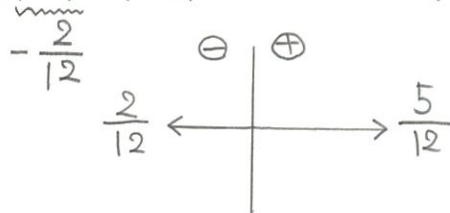
(5)  $(-0.2) + (-0.3) = -0.5$



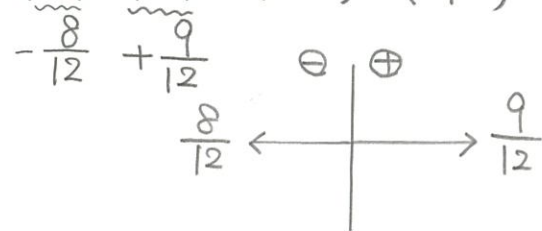
(6)  $(+12.7) + (-18.3) = -5.6$



(7)  $\left(-\frac{1}{6}\right) + \left(+\frac{5}{12}\right) = +\frac{3}{12} = +\frac{1}{4}$



(8)  $\left(-\frac{2}{3}\right) + \left(+\frac{3}{4}\right) = \left(-\frac{8}{12}\right) + \left(+\frac{9}{12}\right) = +\frac{1}{12}$



(9)  $(+7) + (-2) + (-12) + (+5) + (-3) = -5$

